

CHAPTER FOUR

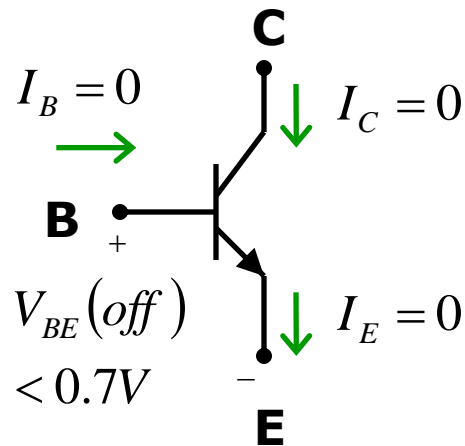
Bipolar Digital Circuits

Digital Electronics.

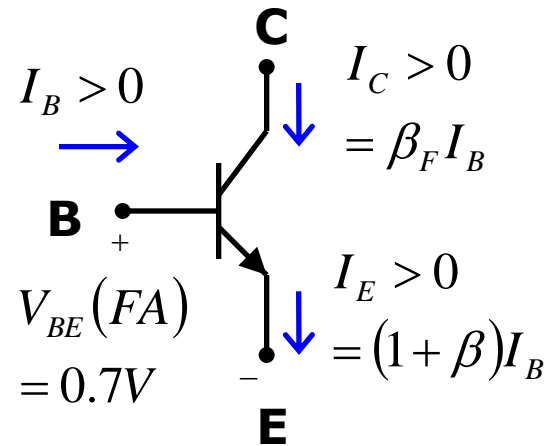
Introduction

- This chapter describes:
 - Basic types of logic circuits:
 1. D-R-L
 2. BJT inverter
 3. T-T-L

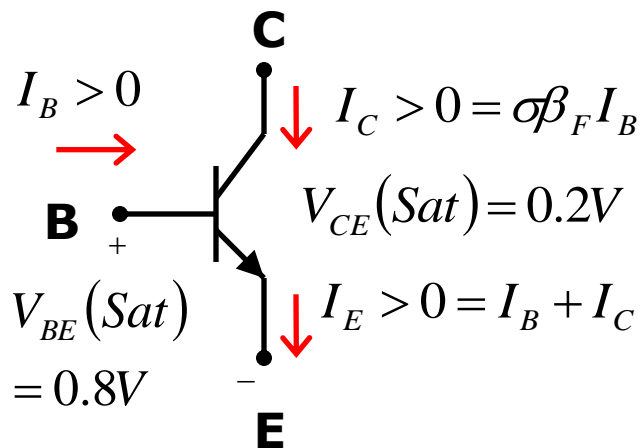
Terminal Currents and Voltages



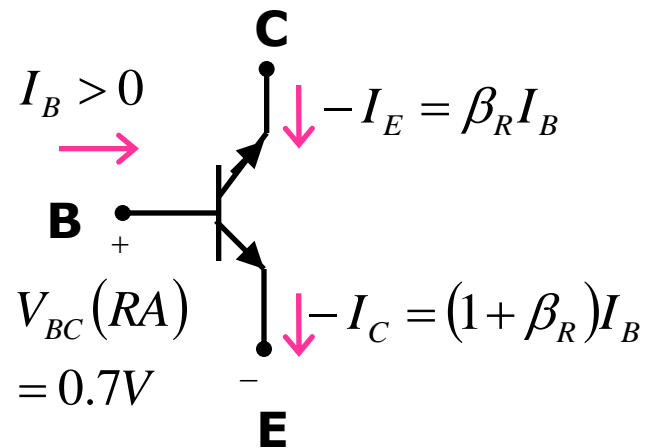
Cut-off Mode



Forward-Active Mode




Saturation Mode



Inverse-Active Mode

Terminal Currents and Voltages



● Example

Determine I_C , I_B , and σ for the BJT shown in the following circuit, assuming $\beta_F=65$

● Solution

Assume FA, $V_{BE}=0.7V$ and then calculate V_{CE} . If $V_{CE} \leq 0.2$ then the BJT operates in saturation mode

$$V_{CE} \ll 0.2$$

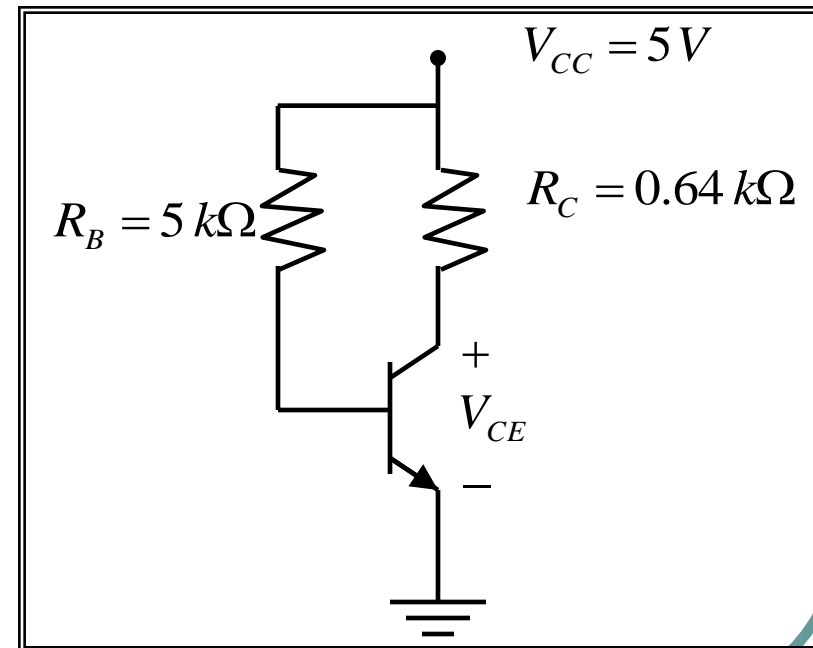
The BJT operates in saturation mode
i.e.

$$V_{CE}(sat) = 0.2V \quad V_{BE}(sat) = 0.8V$$


$$I_B = \frac{V_{CC} - V_{BE}(sat)}{R_B} = 0.84mA$$

$$I_C = \frac{V_{CC} - V_{CE}(sat)}{R_C} = 7.5mA$$

$$\sigma = \frac{I_C}{\beta_F I_B} = 0.137$$



Terminal Currents and Voltages With Known States



● Example

Determine the terminal voltages of the transistors shown in the following circuit, assuming Q_1 operates in saturation mode while Q_2 and Q_3 operate in forward-active mode

● Solution

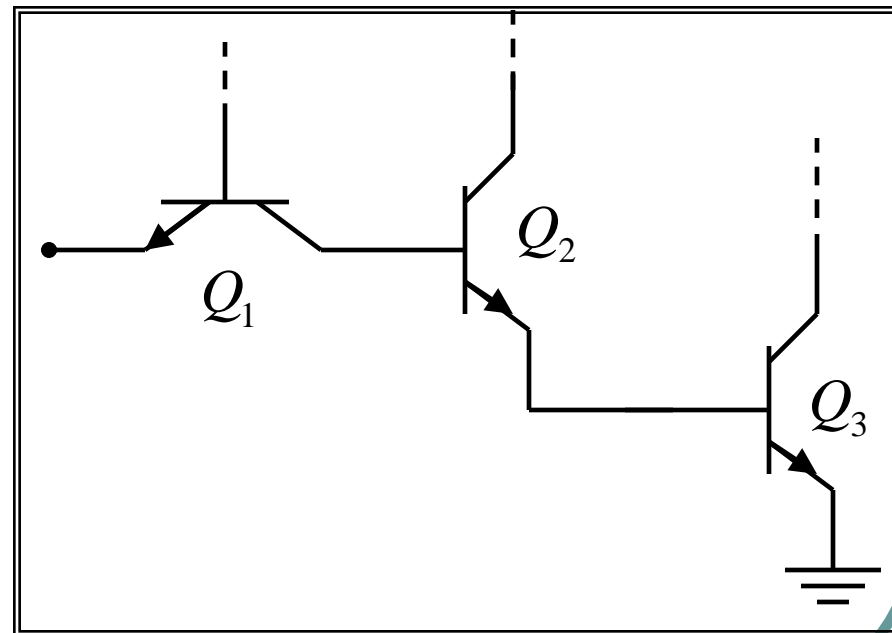
$$V_{E3} = 0.0V$$

$$V_{B3} = 0.7V$$


$$V_{B2} = 0.7 + 0.7 = 1.4V$$

$$V_{B1} = 0.6 + 1.4 = 2V$$

$$V_{E1} = -0.2 + 1.4 = 1.2V$$



Terminal Currents and Voltages With Known States



● Example

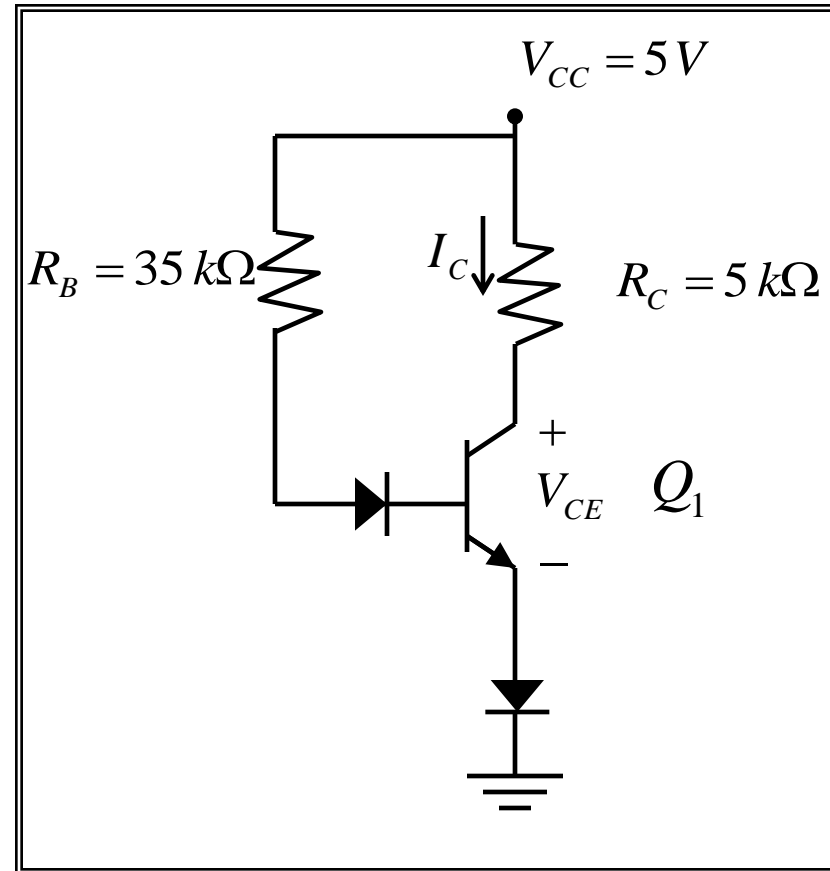
Determine the dissipated power P_{CC} in the following circuit, given that the BJT operates in saturation mode

● Solution


$$P_{CC} = V_{CC} \times \left(\frac{V_{CC} - V_{CE}(sat) - V_D(ON)}{R_C} + \frac{V_{CC} - V_{BE}(sat) - 2V_D(ON)}{R_B} \right)$$

$$P_{CC} = 5 \times (0.82 + 0.08) = 4.5mW$$

$I_{CC} (OL)$



Terminal Currents and Voltages With Known States

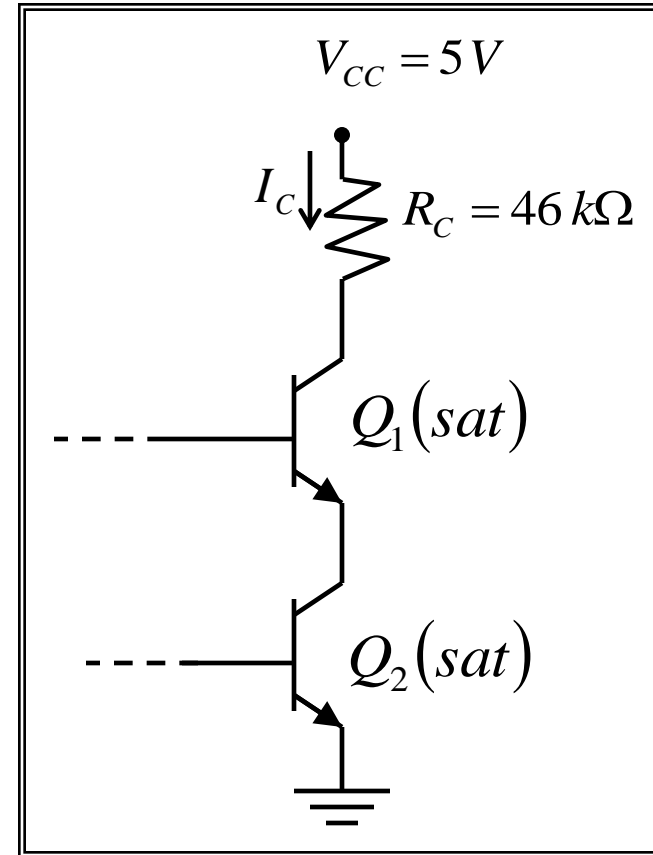


- **Example**


Determine the current I_C in the following circuit.

- **Solution**

$$I_C = \frac{V_{CC} - 2V_{CE}(sat)}{R_C} = 0.1mA$$



Terminal Currents and Voltages With Known States



Example

Determine the current I in the following circuit neglecting the base currents.

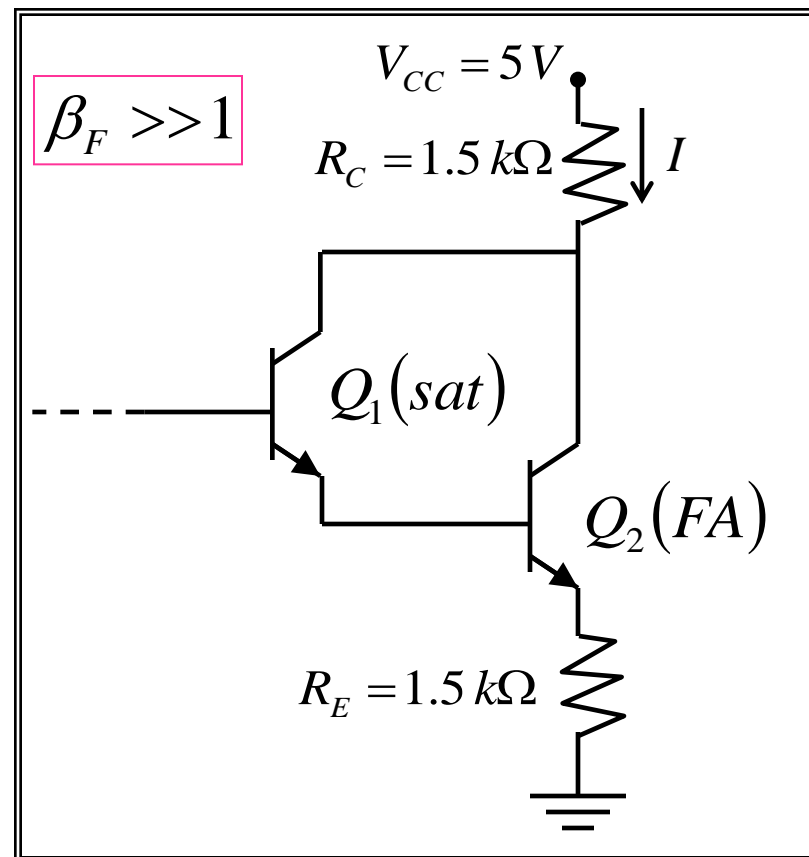
Solution

$$I_{C2} = I_{E2} \quad \text{Since } \beta_F \gg 1$$


$$I_{C2} = I \quad \text{Since } I_{B2} \ll \text{i.e. } I_{E1} \ll \text{ \& } I_{C1} \ll$$

$$I = \frac{V_{CC} - V_{CE1}(sat) - V_{BE1}(FA)}{R_C + R_E}$$

$$I = 1.367 \text{ mA}$$



Terminal Currents and Voltages With Known States



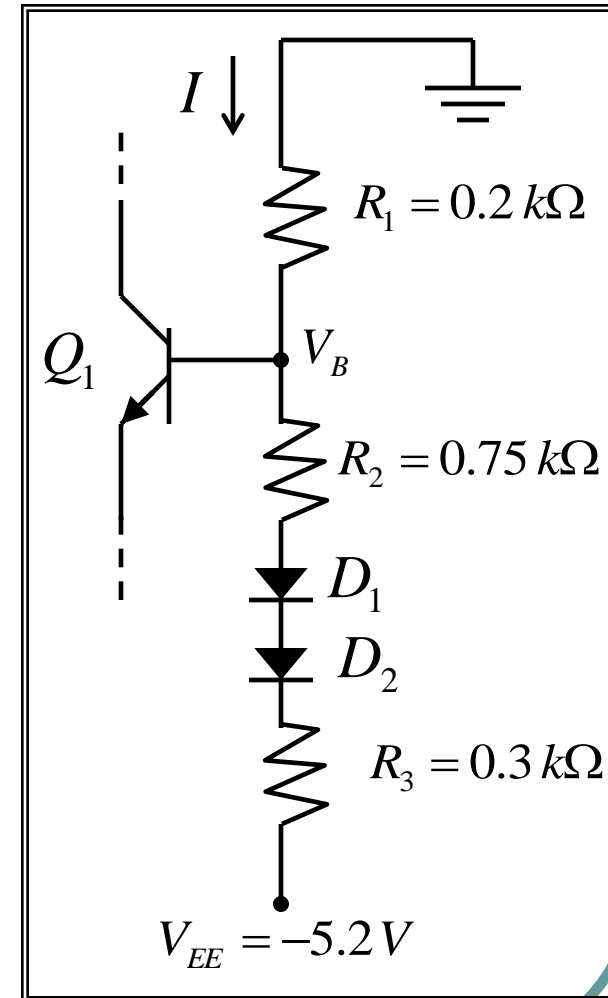
● Example

Determine the voltage V_B and the current I indicated the circuit shown below assuming the base current of Q_1 is negligible.

● Solution

$$I = \frac{0 - V_{EE} - 2V_D(ON)}{R_1 + R_2 + R_3}$$
$$= \frac{5.2 - 1.4}{0.2 + 0.75 + 0.3} = 3.04 \text{ mA}$$

$$V_B = 0 - IR_1 = -3.04 \times 0.2 = -0.608 \text{ V}$$



BJT Inverter (Basic RTL Inverter)

● Voltage-Transfer Characteristics

For $V_I - GND < V_{BE}(FA) \rightarrow I_B = 0, I_C = 0, V_O = V_{CC} = V_{OH}$

For $V_I - GND \geq V_{BE}(FA) \rightarrow I_B = (V_I - V_{BE}(FA)) / R_B, I_C = \beta_F I_B, V_O = V_{CC} - I_C R_C$

For $V_I - GND \geq V_{IH} \rightarrow$

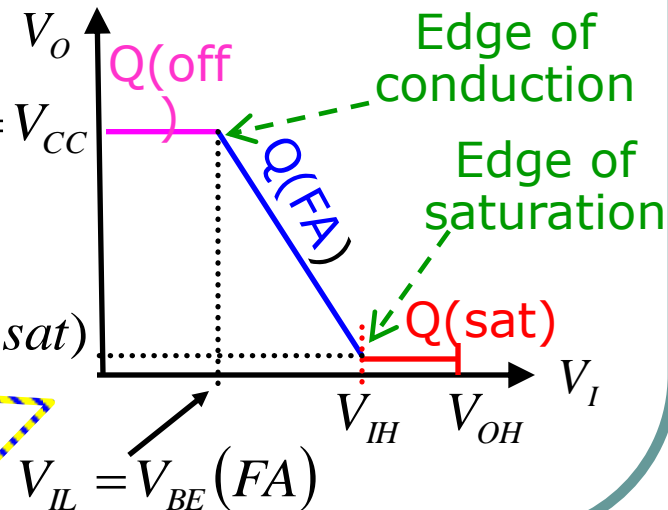
$$\begin{aligned} V_{IH} &= I_B(sat)R_B + V_{BE}(sat) \\ &= I_B(EOS)R_B + V_{BE}(sat) \\ &= \frac{I_C(EOS)}{\beta_F} R_B + V_{BE}(sat) \end{aligned}$$

$$\begin{aligned} I_B &= (V_I - V_{BE}(sat)) / R_B \\ I_C &= (V_{CC} - V_{CE}(sat)) / R_C \\ V_O &= V_{CE}(sat) = V_{OL} \end{aligned}$$

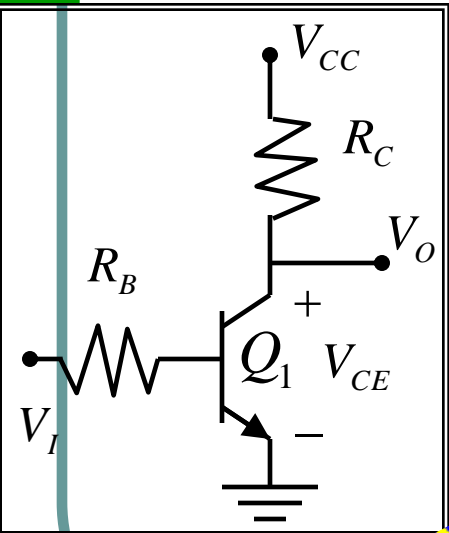
$$V_{OH} = V_{CC}$$

$$V_{OL} = V_{CE}(sat)$$


$$V_{IH} = \frac{V_{CC} - V_{CE}(sat)}{\beta_F R_C} R_B + V_{BE}(sat)$$



$$V_{IL} = V_{BE}(FA)$$



BJT Inverter (Basic RTL Inverter)



● Example

Assume $V_{CC} = 5\text{ V}$, $R_C = 1\text{ k}\Omega$, $R_B = 10\text{ k}\Omega$, $\beta_F = 60$;

Determine the VTC parameters and the low and high noise margins

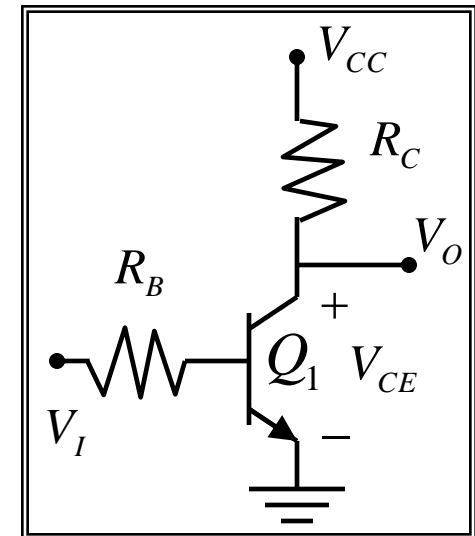
● Solution

$$\begin{aligned} V_{IL} &= 0.7\text{ V}, & V_{IH} &= 1.6\text{ V}, \\ V_{OL} &= 0.2\text{ V}, & V_{OH} &= 5\text{ V}, \end{aligned}$$

$$N_{ML} = V_{IL} - V_{OL} = 0.5\text{ V} \leftarrow$$

$$N_{MH} = V_{OH} - V_{IH} = 3.4\text{ V}$$

Small value



- HW #4: Solve Problems: 4.1 (a)&(d), 4.3, 4.11, 4.12, 4.13, 4.21

Skip sections 4.3-4.6